

1 Write 3.058 correct to 3 significant figures.

..... [1]

2 Write 0.45 as a fraction in its simplest form.

..... [1]

3 Factorise $2x^2 - x$.

..... [1]

4 Find the co-ordinates of the point where the line $y = 3x - 8$ crosses the y-axis.

(..... ,) [1]

5 Giulio's reaction times are measured in two games.

In the first game his reaction time is $\frac{1}{3}$ of a second.

In the second game his reaction time is $\frac{1}{8}$ of a second.

Find the difference between the two reaction times.

..... s [1]

6 The probability that Alex wins a prize is 0.27 .

Find the probability that Alex does not win a prize.

..... [1]

7 The table shows the different methods of travel for 20 people going to work.

Method of travel	Frequency
Car	10
Walk	5
Bike	3
Bus	2

Which type of average, mean, median or mode, can be used for this information?

..... [1]

8 Calculate.

(a) $-12 \div -2$

..... [1]

(b) $\sqrt[3]{2^3 + 2}$

..... [1]

9 Simplify.

$4x - 12y + 10x + 25y$

..... [2]

10 Here is a list of numbers.

- 21 $\frac{2}{3}$ $\sqrt{13}$ 31 $\sqrt{121}$ 51 0.7

From this list, write down

(a) a prime number,

..... [1]

(b) an irrational number.

..... [1]

11 $\mathbf{p} = \begin{pmatrix} 5 \\ 0 \end{pmatrix}$ $\mathbf{q} = \begin{pmatrix} 1 \\ 6 \end{pmatrix}$

Work out $2\mathbf{p} + 3\mathbf{q}$.

$$\left(\quad \right) [2]$$

12 Write down the type of correlation you would expect for the following.

(a) The average speed of a train and the time taken for a journey.

..... [1]

(b) The distance travelled by a car and the amount of fuel used.

..... [1]

13 The scale drawing shows a rock, R .
The scale is 1 centimetre represents 30 metres.
A lighthouse, L , is 210 m from R , on a bearing of 125° .

On the diagram, mark the position of L .



Scale : 1 cm to 30 m
[2]

14 Rearrange $2(w + h) = P$ to make w the subject.

$$w = \dots\dots\dots [2]$$

15 Genaro measures the length, l cm, of his desk as 120 cm, correct to the nearest centimetre.

Complete the statement about the value of l .

$$\dots\dots\dots \leq l < \dots\dots\dots [2]$$

16 Solve.

$$7x - 5 = 16$$

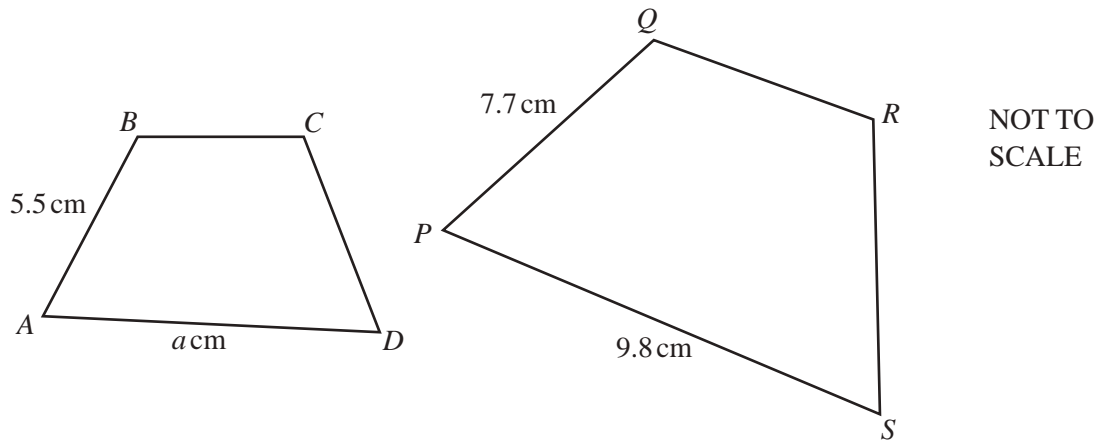
$$x = \dots\dots\dots [2]$$

17 **Without using a calculator**, work out $\frac{12}{35} \times \frac{7}{9}$.

You must show all your working and give your answer as a fraction in its simplest form.

$$\dots\dots\dots [2]$$

18



Shape $ABCD$ is similar to shape $PQRS$.

Work out the value of a .

$$a = \dots\dots\dots [2]$$

19 Harry invests \$800 for 2 years at a rate of 3% per year compound interest.

Calculate the amount of interest he receives at the end of the 2 years.

$$\text{\$ } \dots\dots\dots [3]$$

- 20 Solve the simultaneous equations.
You must show all your working.

$$\begin{aligned}5x - 2y &= 26 \\ 7x + 6y &= 10\end{aligned}$$

$x = \dots\dots\dots$

$y = \dots\dots\dots [3]$

21 (a) Write down the next term in each sequence.

(i) 12, 7, 2, -3, -8, [1]

(ii) 4, 7, 13, 25, 49, [1]

(b) Find an expression, in terms of n , for the n th term of this sequence.

5, 8, 11, 14, ...

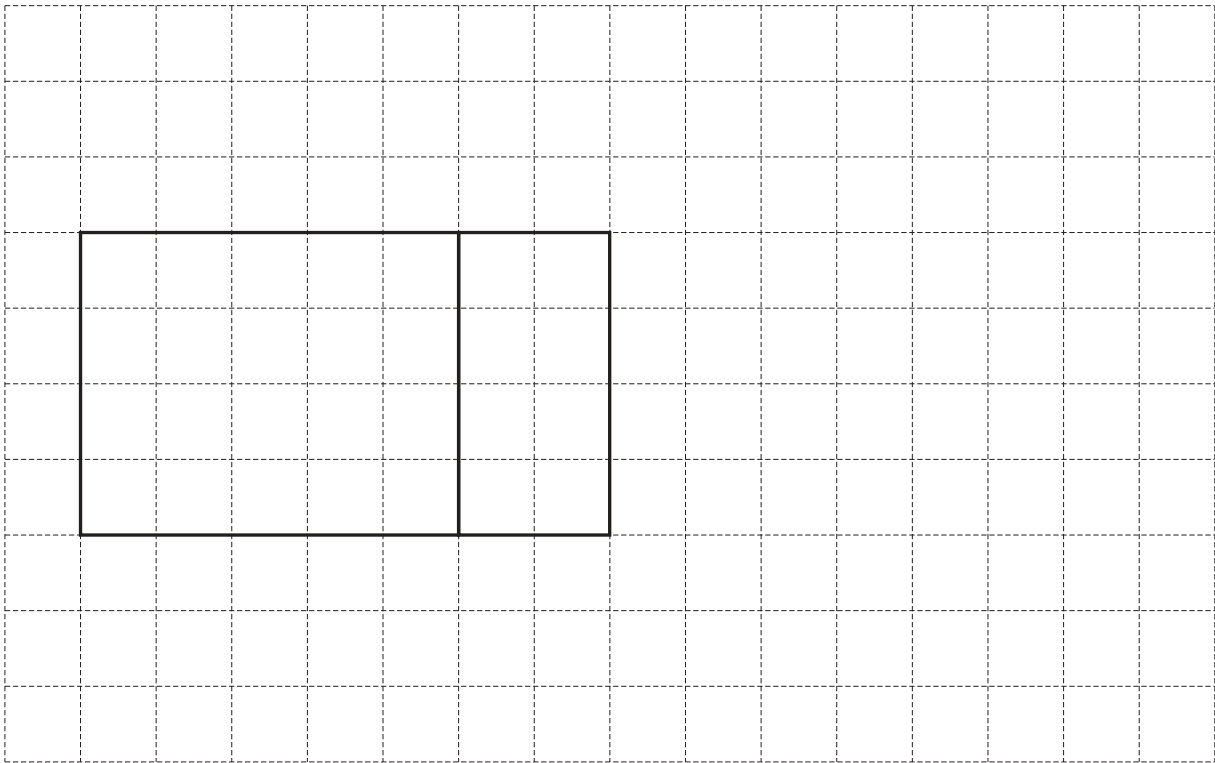
..... [2]

22 A closed box in the shape of a cuboid has length 5 cm, width 4 cm and height 2 cm.

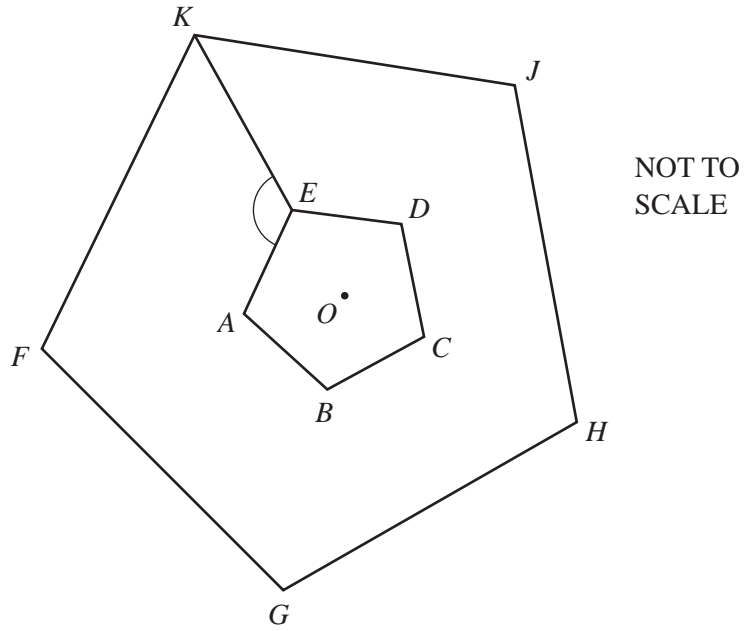
(a) Calculate the volume of the box.

..... cm³ [2]

(b) On the 1 cm² grid, complete the net of this box.



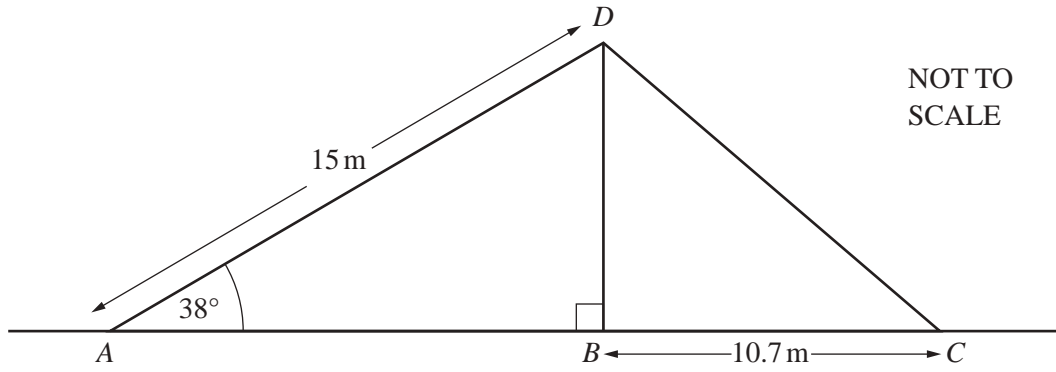
[2]



The diagram shows two regular pentagons.
Pentagon $FGHIK$ is an enlargement of pentagon $ABCDE$, centre O .

Find angle AEK .

Angle $AEK = \dots\dots\dots$ [4]



A vertical flagpole, BD , stands on horizontal ground and is held by two ropes, AD and CD . $AD = 15\text{ m}$, $BC = 10.7\text{ m}$ and angle $DAB = 38^\circ$.

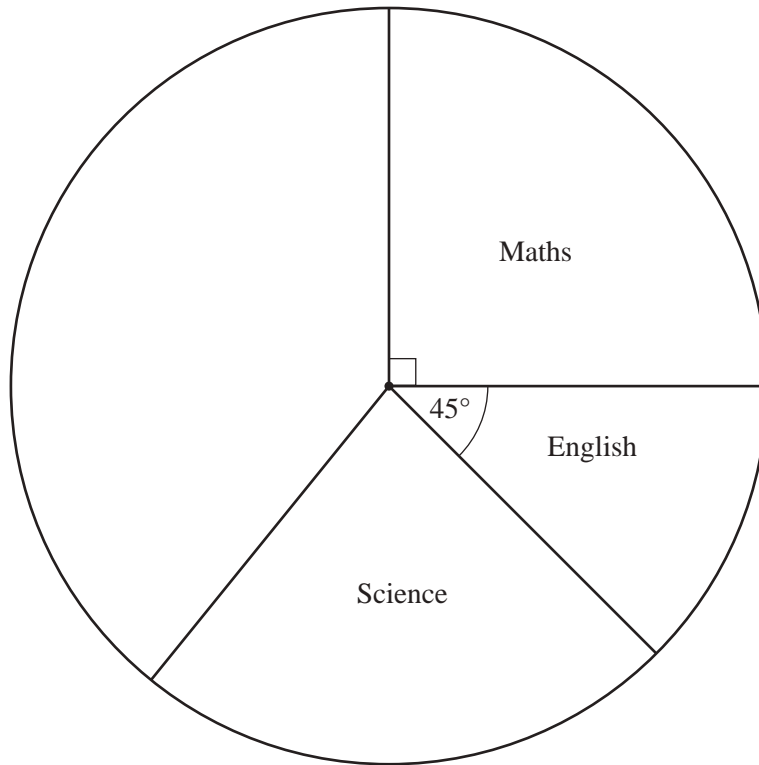
(a) Using trigonometry, calculate BD .

$$BD = \dots\dots\dots\text{ m [2]}$$

(b) Calculate CD .

$$CD = \dots\dots\dots\text{ m [2]}$$

- 25 Jason spends 480 minutes at school each day.
The pie chart shows the time he spends in three of his lessons.



- (a) Measure the sector angle for science.

..... [1]

- (b) Work out the time, in minutes, Jason spends in English.

.....min [2]

- (c) Jason spends 100 minutes in geography and the rest of the day is free time.

Complete the pie chart.

[2]

BLANK PAGE

Permission to reproduce items where third-party owned material protected by copyright is included has been sought and cleared where possible. Every reasonable effort has been made by the publisher (UCLES) to trace copyright holders, but if any items requiring clearance have unwittingly been included, the publisher will be pleased to make amends at the earliest possible opportunity.

To avoid the issue of disclosure of answer-related information to candidates, all copyright acknowledgements are reproduced online in the Cambridge Assessment International Education Copyright Acknowledgements Booklet. This is produced for each series of examinations and is freely available to download at www.cambridgeinternational.org after the live examination series.

Cambridge Assessment International Education is part of the Cambridge Assessment Group. Cambridge Assessment is the brand name of the University of Cambridge Local Examinations Syndicate (UCLES), which itself is a department of the University of Cambridge.